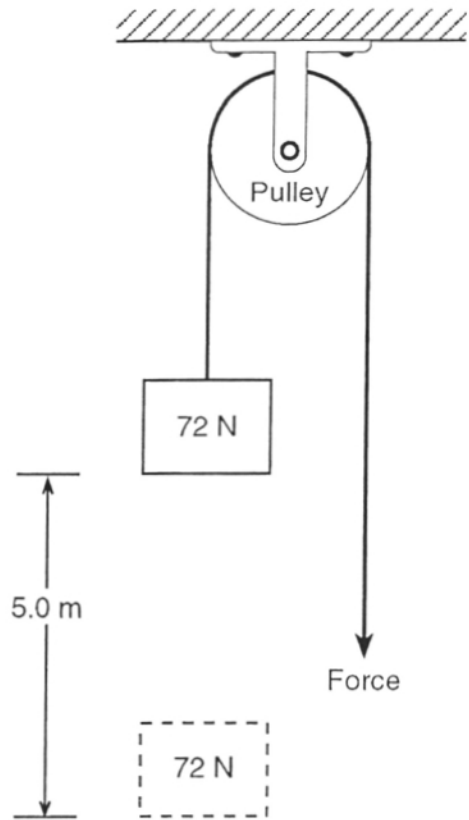


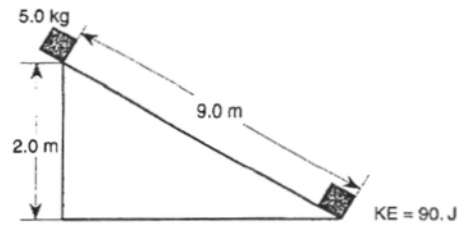
# Work

8. In the diagram below, 400. joules of work is done raising a 72-newton weight a vertical distance of 5.0 meters.



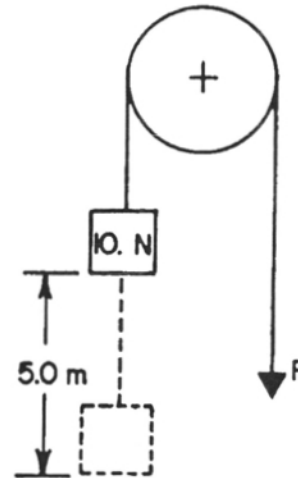
How much work is done to overcome friction as the weight is raised?

9. The diagram below shows a 5.0-kilogram mass sliding 9.0 meters down an incline from a height of 2.0 meters in 3.0 seconds. The object gains 90. joules of kinetic energy while sliding.



How much work is done against friction as the mass slides the 9.0 meters?

10. In the diagram below, 55 joules of work is needed to raise a 10.-newton weight 5.0 meters.



How much work is done to overcome friction as the weight is raised?